

Name:

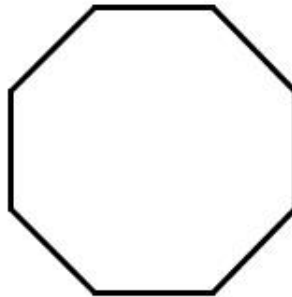
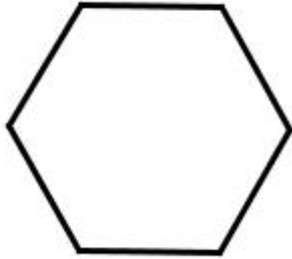
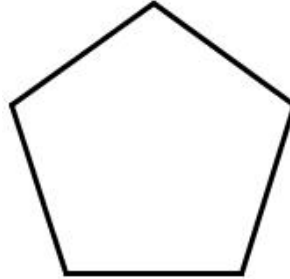

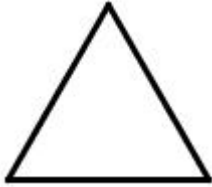
Datum:

Mathematik

Mehrere Symmetrieachsen

Aufgabe :

Finde die Symmetrieachsen. Zeichne sie ein!



Name:

Datum:

Mathematik

Mehrere Symmetrieachsen

Aufgabe :

Finde die Symmetrieachsen. Zeichne sie ein!

